


M4b Test 1

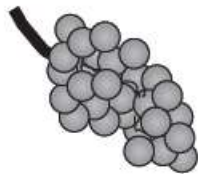
1.



Dev and Joe each buy a book. Dev pays with a £5 note and gets £1.05 change. Joe's book costs £7.

How much **more** does Joe's book cost than Dev's book?


2. Amir and Lara buy some fruit



grapes
£2.50
for 1 kilogram



pineapples
£1.40
each



peaches
£1.99
for a box

- a. Amir buys 2 pineapples and a box of peaches. How much does he pay?
- b. Lara buys half a kilogram of grapes and one pineapple. How much change does she get from £5?